

DELHI PUBLIC SCHOOL JAMMU

SESSION- 2021-2022

Assignment Sheet-2

Name-.....

CLASS-PREP

DATE- 3-09-21

Roll no.....

SUBJECT- ENVIRONMENTAL AND ARITHMETICAL CONCEPTS

***CIRCLE THE GREATEST NUMBER AND CROSS THE SMALLEST NUMBER**

23	43	15
26	55	35
24	27	75
53	25	14
54	34	44

***Write how many tens and ones are there.**

19 ___tens___ ones

32 ___tens___ ones

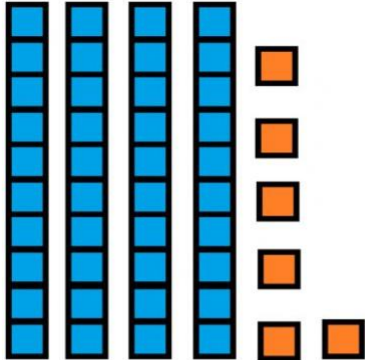






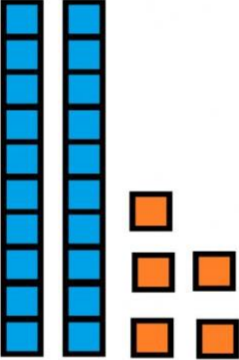






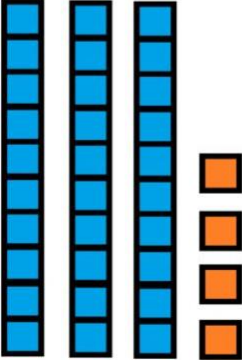




45 ___tens___ ones

29 ___tens___ ones

25 ___tens___ ones

14 ___tens___ ones

***Count how many tens and how many ones.**

	<table border="1"><thead><tr><th>Tens</th><th>Ones</th></tr></thead><tbody><tr><td></td><td></td></tr></tbody></table>	Tens	Ones		
Tens	Ones				
					
	<table border="1"><thead><tr><th>Tens</th><th>Ones</th></tr></thead><tbody><tr><td></td><td></td></tr></tbody></table>	Tens	Ones		
Tens	Ones				
					
	<table border="1"><thead><tr><th>Tens</th><th>Ones</th></tr></thead><tbody><tr><td></td><td></td></tr></tbody></table>	Tens	Ones		
Tens	Ones				
